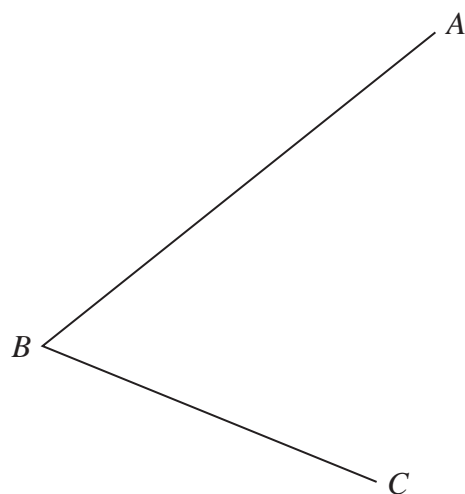
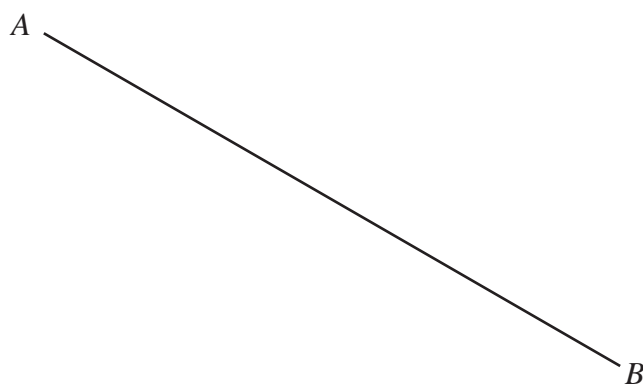


- 1** Using ruler and compasses only, construct the bisector of angle ABC .
You must show all your construction lines.



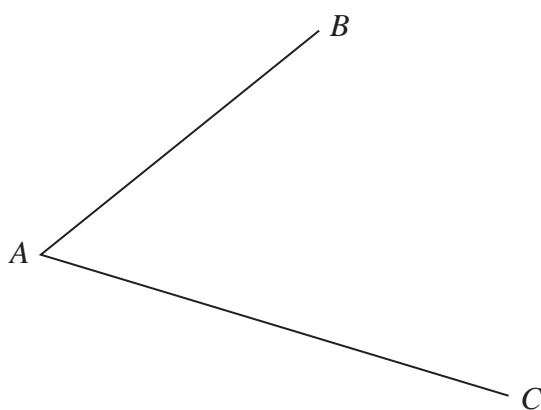
(Total for Question 1 is 2 marks)

- 2** Use ruler and compasses only to construct the perpendicular bisector of the line AB .
You must show all your construction lines.



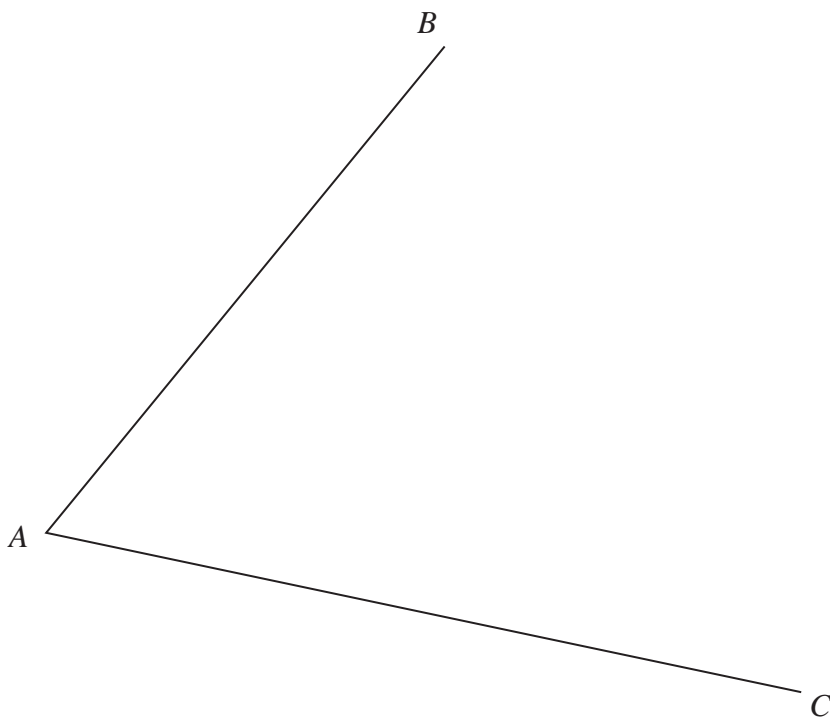
(Total for Question 2 is 2 marks)

- 3** Use ruler and compasses to construct the bisector of angle BAC .
You must show all your construction lines.



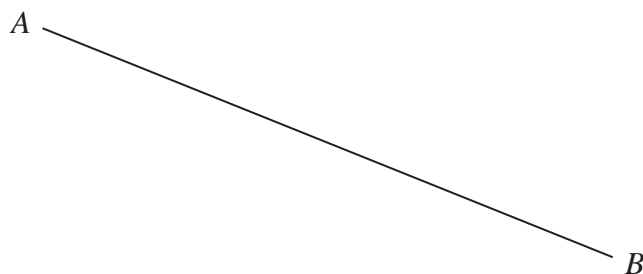
(Total for Question 3 is 2 marks)

- 4 Using ruler and compasses only, construct the bisector of angle BAC
You must show all your construction lines.



(Total for Question 4 is 2 marks)

- 5** Use ruler and compasses only to construct the perpendicular bisector of line AB
You must show all your construction lines.



(Total for Question 5 is 2 marks)